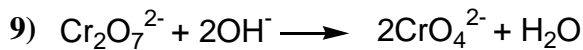
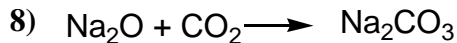
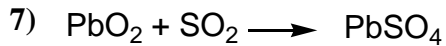
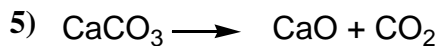

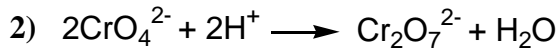
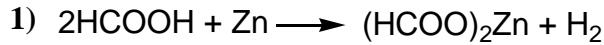
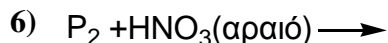
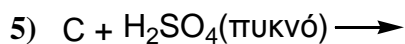
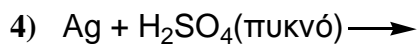
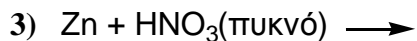
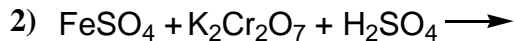


ΤΕΣΤ

A) Ποιές από τις παρακάτω αντιδράσεις είναι μεταθετικές και ποιές οξειδοαναγωγικές;



B) Να συμπληρωθούν οι παρακάτω χημικές αντιδράσεις:



C) Στις παρακάτω χημικές αντιδράσεις να βρεθούν το οξειδοτικό και το αναγωγικό:

